


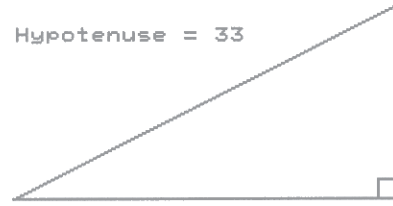
Hypotenuse = _____



Height = 28

Base = 75

Hypotenuse = 33



Height = _____

Base = 19

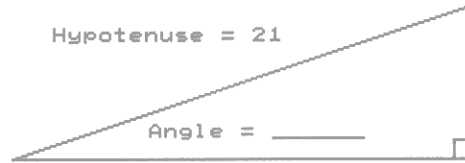
Hypotenuse = 35



Height = 11

Base = _____

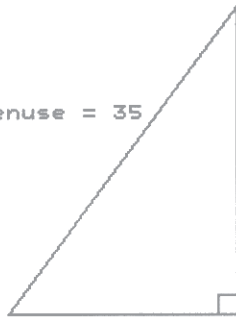
Hypotenuse = 21



Height = 8.25

Angle = _____

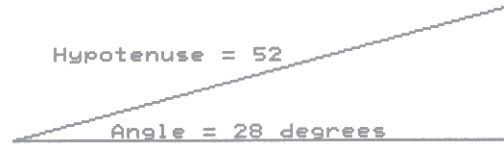
Hypotenuse = 35



Height = _____

Angle = 68 degrees

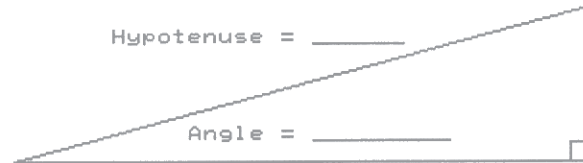
Hypotenuse = 52



Angle = 28 degrees

Base = _____

Hypotenuse = _____



Height = 27

Angle = _____

Base = 62